


# Rounding to the Nearest

# 10



**Learning Objective: To round to the nearest 10**

Remember when rounding to find the focus digit

If the focus digit is

0 - 4

You round down.

If the focus digit is

5 - 9

You round up

0 1 2 3 4 5 6 7 8 9



**Learning Objective: To round to the nearest 10**

Which ten is the following number nearest to?

36




30

40

**Learning Objective: To round to the nearest 10**

Which ten is the following number nearest to?

82



**Learning Objective: To round to the nearest 10**

Which ten is the following number nearest to?

125




120

130

**Learning Objective: To round to the nearest 10**

Which ten is the following number nearest to?

980




980

990

**Learning Objective: To round to the nearest 10**

Which ten is the following number nearest to?

1457




1450

1460

# Rounding to the Nearest

# 100





**Learning Objective: To round to the nearest 100**

Which hundred is the following number nearest to?

156




100

200

**Learning Objective: To round to the nearest 100**

Which hundred is the following number nearest to?


215



**Learning Objective: To round to the nearest 100**

Which hundred is the following number nearest to?

1670



1600

1700

**Learning Objective: To round to the nearest 100**

Which hundred is the following number nearest to?

1950




1900

2000

**Learning Objective: To round to the nearest 100**

Which hundred is the following number nearest to?

3370




3300

3400

# Rounding to the Nearest


# 1000



**Learning Objective: To round to the nearest 1000**

Which thousand is the following number nearest to?

2352



2000

3000


**Learning Objective: To round to the nearest 1000**

Which thousand is the following number nearest to?

3892

3000

4000






**Learning Objective: To round to the nearest 1000**

Which thousand is the following number nearest to?

4090



**Learning Objective: To round to the nearest 1000**

Which thousand is the following number nearest to?

3593



3000

4000

**Learning Objective: To round to the nearest 1000**

Which thousand is the following number nearest to?

7457



7000

8000

